





Use the array provided to solve each problem.


1)  $27 \times 20 =$




2)  $20 \times 23 =$




3)  $29 \times 20 =$




4)  $24 \times 20 =$



5)  $28 \times 20 =$



6)  $20 \times 26 =$



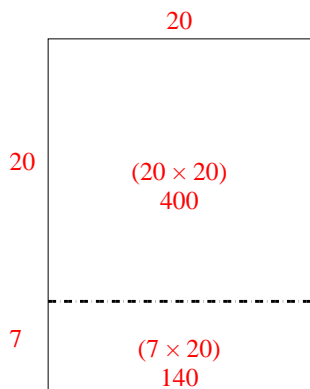
Answers

- 1. \_\_\_\_\_
- 2. \_\_\_\_\_
- 3. \_\_\_\_\_
- 4. \_\_\_\_\_
- 5. \_\_\_\_\_
- 6. \_\_\_\_\_

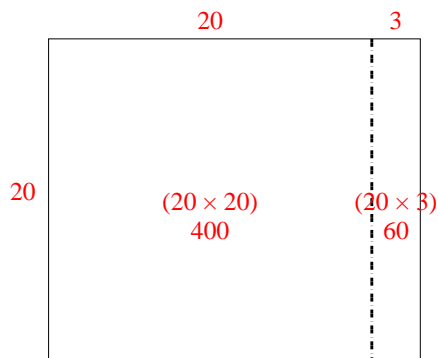


Use the array provided to solve each problem.

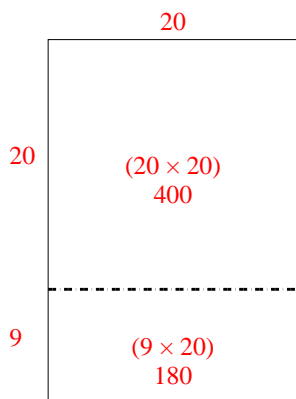
1)  $27 \times 20 =$



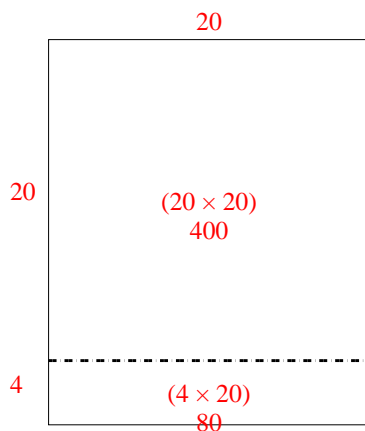
2)  $20 \times 23 =$



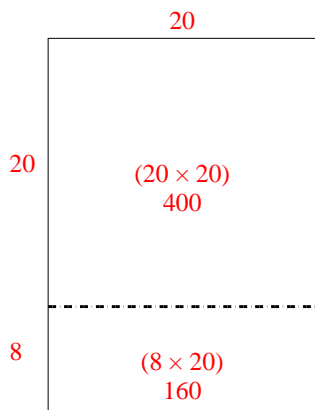
3)  $29 \times 20 =$



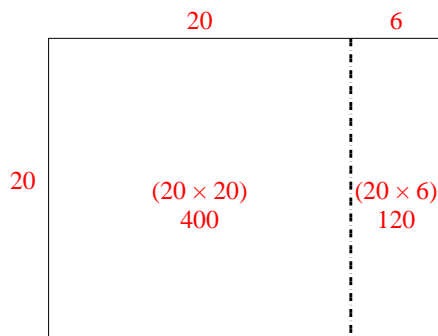
4)  $24 \times 20 =$



5)  $28 \times 20 =$



6)  $20 \times 26 =$



Answers

1. **540**

2. **460**

3. **580**

4. **480**

5. **560**

6. **520**